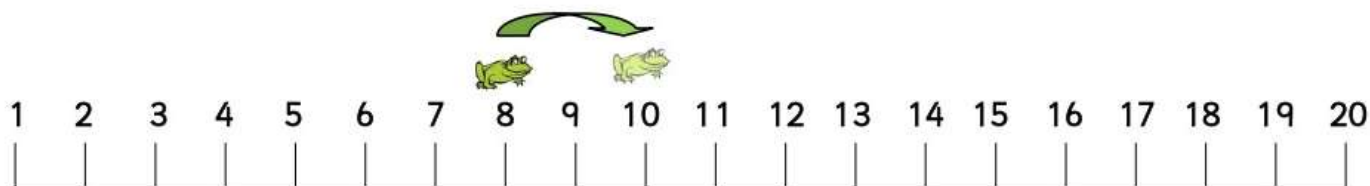
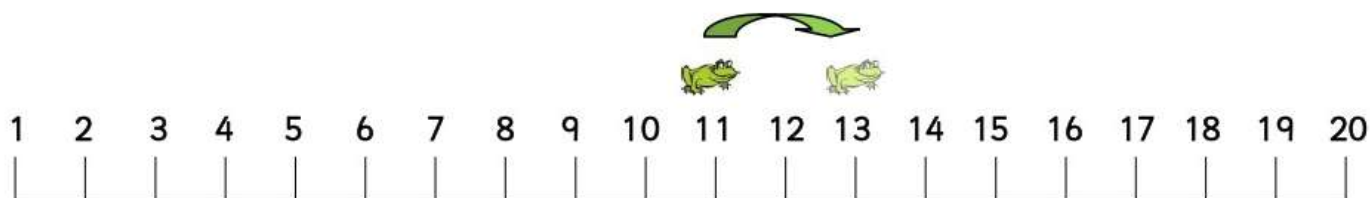


Hopping along in twos



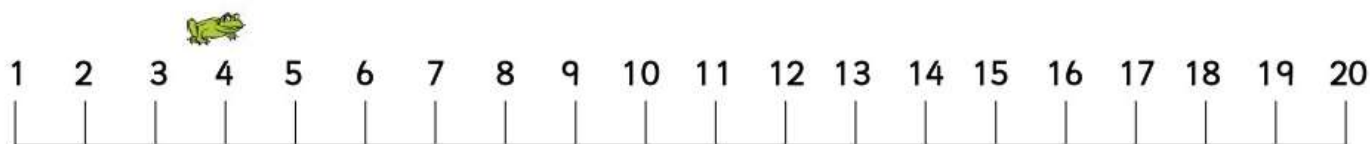
1. Start at 8. Count 3 hops of 2 along the number line.

What number do you land on?



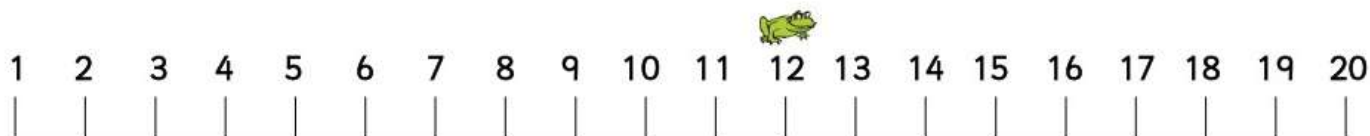
2. Start at 11. Count 4 hops of 2 along the number line.

What number do you land on?



3. Start at 4. Count 5 hops of 2 along the number line.

What number do you land on?



4. Start at 12. Count 3 hops of 2 along the number line.

What number do you land on?