



Let's Count the Flowers


Take a look at the flower pictures below. Count and write down the number of flowers in each pot.




$1 + 2 = \dots\dots\dots$




$1 + 1 = \dots\dots\dots$



$3 + 2 = \dots\dots\dots$



$4 + 1 = \dots\dots\dots$



$2 + 3 = \dots\dots\dots$