



COUNTING DICE


How many dots can you count on the dice? Circle how there are.




= 1 5 2




= 3 6 1




= 3 6 1




= 4 1 2




= 4 1 2




= 5 6 3




= 3 2 4



= 1 5 2



= 2 4 5



= 2 4 5