


Addition Problems


Read each word problem. Count the pictures to find the sum.

1. Joy gave me 2 candies.
Emma gave me 4 candies.
How many do I have in all?




$$\underline{\quad} + \underline{\quad} = \underline{\quad}$$

2. I have 4 ribbons.
Maria gave me 4 more.
How many do I have in all?



$$\underline{\quad} + \underline{\quad} = \underline{\quad}$$

3. George has 5 balls.
Billie has 4 balls.
How many balls do they have?



$$\underline{\quad} + \underline{\quad} = \underline{\quad}$$