

Maths Worksheet - KS2

Section 1

Put the numbers in order, starting with the lowest.

15 18 12 16

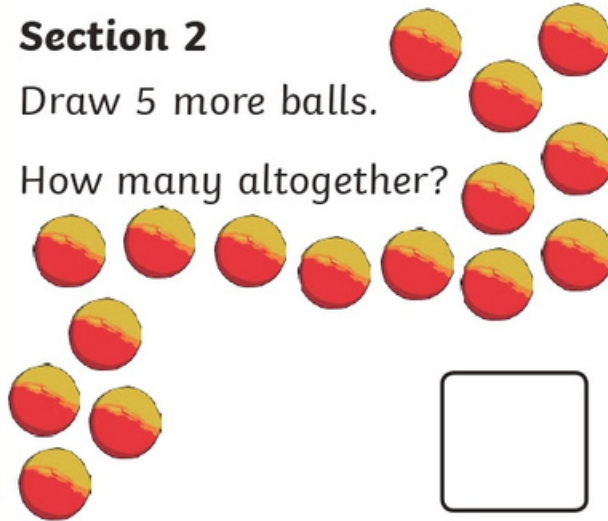
<input type="text"/>	<input type="text"/>	<input type="text"/>	<input type="text"/>
----------------------	----------------------	----------------------	----------------------



Section 2

Draw 5 more balls.

How many altogether?



Section 3

$$11 + 7 = \square$$

$$15 - 7 = \square$$

$$12 - 3 = \square$$

Section 4


Freija eats half the sweets. How many sweets are left?



Section 5

Group the cookies in twos.

How many groups are there?



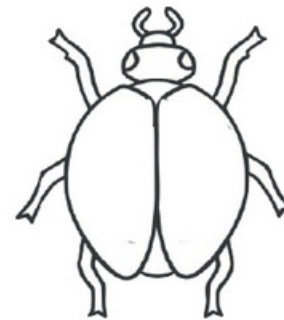
Section 6

Tick the coins which add to 35p.



Section 7

Draw 12 spots onto the ladybird. An equal number on each side.



Section 8

Fill in the missing number.

24, 22, 20, , 16, 14

