



Sweet Subtractions


Write the answers on the sweet jars. Then, write the number sentence on the line below.




$$- \quad \mathbf{1} \quad =$$




$$- \quad \mathbf{3} \quad =$$



$$- \quad \mathbf{2} \quad =$$



$$- \quad \mathbf{5} \quad =$$



$$- \quad \mathbf{4} \quad =$$

