


Properties of shapes

Name: _____ Date: _____

1. Match each 2D shape to its name.



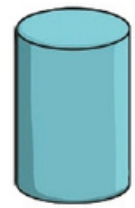
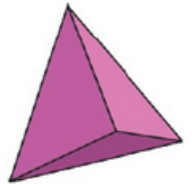
circle

rectangle

square

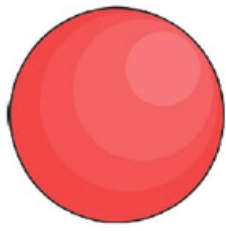
2 marks

2. Circle the cone.



1 mark

3. Circle the name of this 3D shape.



cylinder

cube

sphere

1 mark

4. Match each everyday object to its shape's name.



cone



cuboid



cylinder



sphere



cube

2 marks