




# Times Table Hunt: 2x, 3x, 5x and 10x Table


Detective Dog is on the hunt for some missing numbers from the 2x, 3x, 5x and 10x tables. Can you help him find them?


1.  $2 \times 3 =$  

2.  $7 \times$    $= 35$

3.  $16 = 8 \times$  


4.  $4 \times 5 =$  


5.  $3 \times 10 =$  


6.   $= 11 \times 5$

7.  $7 \times 3 =$  

8.  $8 \times$    $= 80$

9.   $= 7 \times 5$

10.  $36 =$    $\times 3$

11.   $\times 2 = 18$

12.  $0 \times 5 =$  