










Identifying Quarters, Thirds and Halves

Write one of these fractions in each answer box: $\frac{1}{3}$ $\frac{1}{4}$ $\frac{1}{2}$ $\frac{3}{4}$

<p>1. What fraction of the animals are snakes?</p>  <p><input type="text"/></p>	<p>2. What fraction of the pizza has been eaten?</p>  <p><input type="text"/></p>
<p>3. What fraction of the pizza is remaining?</p>  <p><input type="text"/></p>	<p>4. What fraction of the length of the big pencil are the small pencils?</p>  <p><input type="text"/></p>
<p>5. What fraction of these apples are circled?</p>  <p><input type="text"/></p>	<p>6. What fraction of this shape is shaded?</p>  <p><input type="text"/></p>
<p>7. How much of his chocolate bar does Steve have left?</p> <p>Sami's Bar </p> <p>Steve's Bar </p> <p><input type="text"/></p>	<p>8. What fraction of his dad's height is Michael?</p>  <p><input type="text"/></p>