

Counting Patterns Beyond 10

How many flowers are on the bush?

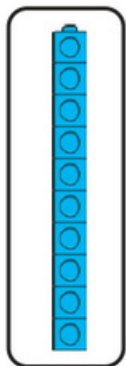


Which number comes next?

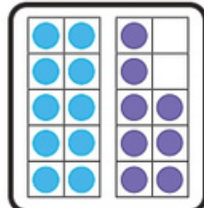
12, 13, 14,

 ,


Match the numeral to the representation.



18

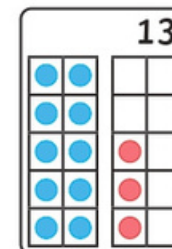
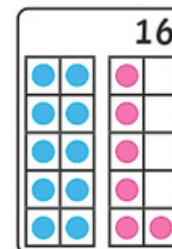
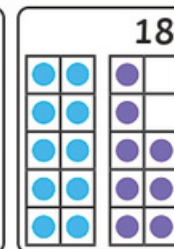
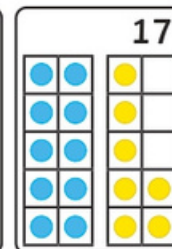
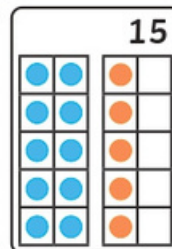
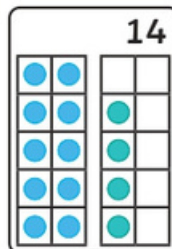


10



13

Which number is missing?



1 2 3 4 5
6 7 8 9 10

